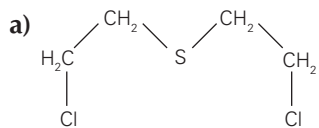
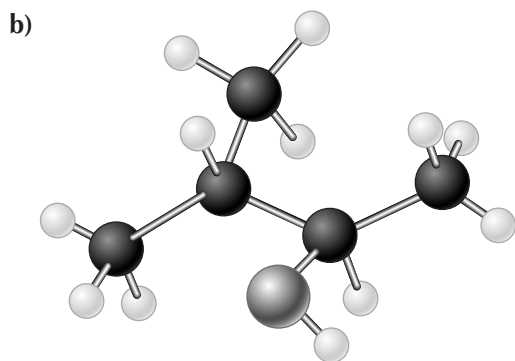


Exercícios

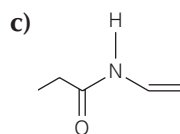
1 Classifique a cadeia carbônica dos compostos a seguir:



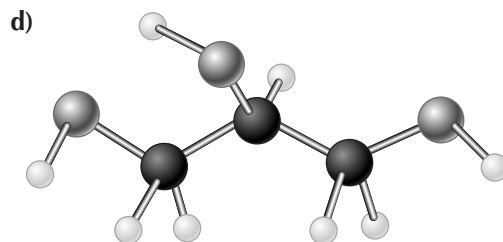
- | | |
|------------------------------------|--------------------------------------|
| <input type="checkbox"/> aberta | <input type="checkbox"/> fechada |
| <input type="checkbox"/> normal | <input type="checkbox"/> ramificada |
| <input type="checkbox"/> saturada | <input type="checkbox"/> insaturada |
| <input type="checkbox"/> homogênea | <input type="checkbox"/> heterogênea |



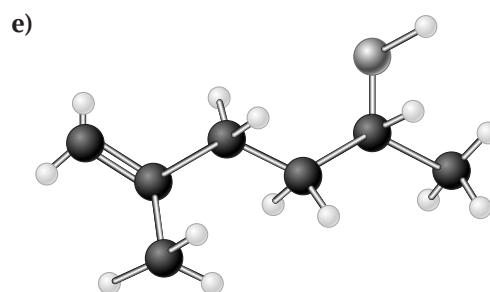
- | | |
|------------------------------------|--------------------------------------|
| <input type="checkbox"/> aberta | <input type="checkbox"/> fechada |
| <input type="checkbox"/> normal | <input type="checkbox"/> ramificada |
| <input type="checkbox"/> saturada | <input type="checkbox"/> insaturada |
| <input type="checkbox"/> homogênea | <input type="checkbox"/> heterogênea |



- | | |
|------------------------------------|--------------------------------------|
| <input type="checkbox"/> aberta | <input type="checkbox"/> fechada |
| <input type="checkbox"/> normal | <input type="checkbox"/> ramificada |
| <input type="checkbox"/> saturada | <input type="checkbox"/> insaturada |
| <input type="checkbox"/> homogênea | <input type="checkbox"/> heterogênea |

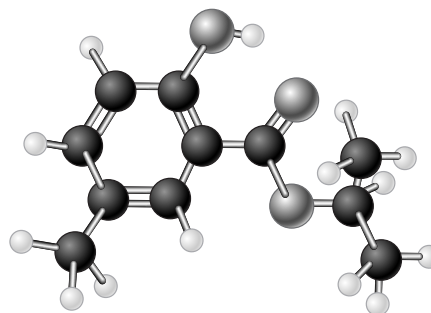


- | | |
|------------------------------------|--------------------------------------|
| <input type="checkbox"/> aberta | <input type="checkbox"/> fechada |
| <input type="checkbox"/> normal | <input type="checkbox"/> ramificada |
| <input type="checkbox"/> saturada | <input type="checkbox"/> insaturada |
| <input type="checkbox"/> homogênea | <input type="checkbox"/> heterogênea |



- | | |
|------------------------------------|--------------------------------------|
| <input type="checkbox"/> aberta | <input type="checkbox"/> fechada |
| <input type="checkbox"/> normal | <input type="checkbox"/> ramificada |
| <input type="checkbox"/> saturada | <input type="checkbox"/> insaturada |
| <input type="checkbox"/> homogênea | <input type="checkbox"/> heterogênea |

2 Observe a estrutura.



Essa molécula apresenta cadeia:

- a) aberta, insaturada e heterogênea.
 b) fechada, insaturada e homogênea.
 c) mista, insaturada e homogênea.
 d) mista, insaturada e heterogênea.
 e) mista, saturada e heterogênea.